

RESTART QUIZ

VIEW ANSWERS

1 point(s)

Category: Current Affairs

HRD Minister Prakash Javadekar has recently launched which education based mobile app ?

PUSHA

RUSA

SAGAR

KELA

VIDYA

Incorrect



■ Answered ■ Review

1 point(s)

Category: General Awareness

State-owned BSNL has recently started satellite phone service through INMARSAT which will be initially offered to government agencies and later opened for others citizen in phased manner. INMARSAT is abbreviated as _____

International Maritime Satellite

International Marine Space

- Internal Maritime Sanchalan
- International Maritime Sanchalan
- International Maritime Sampadan

Incorrect

1 point(s)

Category: General Awareness

Tehmtan R. Andhyarujina, who passed away recently, was a/an

- bureaucrat
- jurist
- musician
- biologist
- industrialist

Incorrect

1 point(s)

Category: General Awareness

The govt-owned Hudco has received SEBI's approval to float initial public offer to offload 10 per cent stake through an OFS route. Here, the term OFS stands for

Offer For Stock

Offer For Subscription

Offer For Sale

Offer For Subsidy

None of these

Incorrect

1 point(s)

Category: General Awareness

The Pravasi Bharatiya Divas is celebrated in India on

7 jan

5 jan

17 jan

9 jan

none of these

Incorrect

1 point(s)

Category: General Awareness

whic state launched Arogya Raksha family helt in surance scheme on first day of new year .

- Tamilnadu
- keral
- Telangana
- Haryana
- none of these

Incorrect

1 point(s)

Category: General Awareness

Mori Village gets Smart digital village which of the following State

- Kerala
- Andhra Pradesh
- Punjab
- Rajsthan
- none of the these

Incorrect

1 point(s)

Category: General Awareness

Winner of The 26th Bihari Puruskar 2016 for his book "Yeh Ek Dunia"

- Bhagwati Lal Vyas
- Yashwant Vyas
- Satya Narayan
- Satendra Nath
- none of these

Incorrect

1 point(s)

Category: General Awareness

The Us footballer named Best FIFA women's Player of 2016

- Carli Lloyd
- Aya Miyama
- Alex Morgan
- Melanie Behringer
- none of these

Incorrect

1 point(s)

Category: General Awareness

Beirut is the capital city which of the country ?

Ethiopia

Cyprus

Turkey

Lebanon

Syria

Incorrect

COMMENTS



sumit modi

good

4 months ago ↩



Prince Ambedkar

Best website for all types examination.....thanks....

4 months ago ↩

RESTART QUIZ

VIEW ANSWERS

1 point(s)

Category: General Awareness

43rd G-7 Summit was held recently
in_____

- Italy
- Germany
- USA
- Canada
- None of these

Incorrect



■ Answered ■ Review

1 point(s)

Category: General Awareness

Unions to observe _____ as 'Save public sector banks' day

- 19 June
- 15 March
- 19 July
- 12 August

None of these

Incorrect

1 point(s)

Category: General Awareness

The Reserve Bank of India will soon put into circulation currency notes in _____ denomination

10 Rupee

5 Rupee

2 Rupee

1 Rupee

None of these

Incorrect

1 point(s)

Category: General Awareness

Himachal Pradesh DGP _____ appointed new NDRF chief

Sanjay Kumar

Anil Verma

Vinod Kumar

Sachin Dua

None of these

Incorrect

1 point(s)

Category: General Awareness

_____appointed as Chairman of Tata Global Beverages Limited

Harmanpreet Kaur

N Chandrasekaran

Sunil Mehta

Shaktikanta Das

None of these

Incorrect

1 point(s)

Category: General Awareness

Name the cricketer who has become the first Indian Women cricketer to play in Kia Super League, the England T20 League.

Thirush Kamini

Mona Meshram

Mithali Raj

Harmanpreet Kaur

None of these

Incorrect

1 point(s)

Category: General Awareness

NHIDC is a fully owned company of the Ministry of Road Transport & Highways, Government of India. What does 'I' stands for in NHIDC?

India

Infrastructure

Inclined

Investment

No None of these

Incorrect

1 point(s)

Category: General Awareness

India successfully test-fired its indigenously developed nuclear-capable Prithvi-II missile from a test range in Odisha. It is _____ missile

Surface-to-Surface

Air-to-Surface

Air-to-Air

Both A & B

None of these

Incorrect

1 point(s)

Category: General Awareness

India has ranked _____ out of 163 countries on Global Peace Index 2017 published by The Institute of Economics and Peace.

127th

117th

137th

107th

None of these

Incorrect

1 point(s)

Category: General Awareness

The UN General Assembly elected Slovak foreign minister _____ to be the next president of the 193-member powerful body.

Miroslav Lajcak

Kofi Annan

Boutros Boutros-Ghali

Javier Perez de

None of these

Incorrect

COMMENTS



Nicky Sharma

its good but if you dont mind may i know these question in hindi...

3 months ago ↩

Sirajuddin Saifi

[RESTART QUIZ](#)[VIEW ANSWERS](#)

1 point(s)

Category: General Awareness

Uttar Pradesh Government has signed an agreement with Asian Development Bank (ADB) for a loan of _____ crore rupees

- 1200 crore
- 1850 crore
- 1950 crore
- 2000 crore
- None of these

Incorrect



■ Answered ■ Review

1 point(s)

Category: Computer Awareness

Dangal becomes 1st Indian movie to earn Rs2,000 cr worldwide: Forbes. Who is the Director of Dangal.

- Satish Kaushik
- Nitesh Tiwari

- Ram Gopal vema
- Madhur Bhandarkar
- None of these

Incorrect

1 point(s)

Category: Computer Awareness

The PM of Netherland is

- Salva Kiir Mayardit
- Juan Evo Morales Ayma
- Mr. Mark Rutte.
- Amama Mbabazi
- None of these

Incorrect

1 point(s)

Category: General Awareness

World Bank clears \$250-million loan to train India's job seekers .World Bank was Founded in .

1956

1944

1985

1964

None of these

Incorrect

World Bank clears \$250-million loan to train India's job seekers The World Bank has cleared a USD 250-million loan for making Indian youth more employable through reskilling, in a move that is seen to aid the Skill India Mission .The multi-lateral lender is keen to support the Indian government in its efforts to better equip the young workforce with employable skills. Under the program, adults in 15-59 years of age, underemployed or unemployed, will get the skill training.

- The Washington-headquartered World Bank.
- It was Founded in 1944.
- Jim Yong Kim is the President of The World Bank

1 point(s)

Category: General Awareness

_____ appointed as ambassador for Government's Skill India campaign

Priyanka Chopra

Vidya balan

Amitabh bachchan

Kareena Kapoor

None of these

Incorrect

Actress Priyanka Chopra has been appointed as the ambassador for government's flagship Skill India campaign, with the National Skill Development Corporation. Priyanka will use her celebrity status to motivate youngsters to hone their abilities through a media campaign.

- The Skill India campaign was launched by Prime Minister Modi in July 2015.
- The government aims to train 40 crore people by 2022 through its skilling initiatives.
- The MD and CEO of National Skill Development Corporation is Manish Kumar.

1 point(s)

Category: General Awareness

Romanian President appoints _____ as Prime Minister.

Barnabus Sibusiso Dlamini

Mihai Tudose

Robert Fico

Ralph Everard Gonsalves

None of these

Incorrect

1 point(s)

Category: General Awareness

Federer lifts ninth Halle Open title, defeated Alexander Zverev .Roger Federer is from

- Germany
- Romanian
- Switzerland
- Canada
- None of these

Incorrect

Federer lifts ninth Halle Open title, defeated Alexander Zverev Swiss legend Roger Federer has clinched his ninth Halle Open title after beating Alexander Zverev 6-1, 6-3 in the final. The top seed Roger Federer showed no mercy with fourth seed Alexander Zverev after wrapping up his ninth title in his 11th Halle final The final took place at the Gerry Weber Stadium in Halle, Germany . The match was the quickest final in the history of the Halle Open.

- Roger Federer is from Switzerland.
- Alexander Zverev is from Germany.
- The Halle Open also called as the Gerry Weber Open, is a tennis tournament held in Halle, North Rhine-Westphalia, Germany.

1 point(s)

Category: General Awareness

Lupin founder & Chairman _____passes away.

- Dr Deepak das

Dr. Anad Raj Mehta

Dr. Rahul Dev

Dr. Desh Bandhu Gupta

None of these

Incorrect

1 point(s)

Category: General Awareness

International Day Against Drug Abuse and Illicit Trafficking

21 June

12 June

3 June

26 June

None of these

Incorrect

1 point(s)

Category: General Awareness

_____wins Miss World title in bodybuilding championship

Manushi Chhillar

Bhumika Sharma

Rasika Goswami

Anandita Rai

None of these

Incorrect



Connect with Facebook



Connect with Google



Connect with Twitter

Your email address will not be published. Required fields are marked *

Your Comment...

Name *

RESTART QUIZ

VIEW ANSWERS

1 point(s)

Category: General Awareness

Who has been appointed as president of the international Economic Association (IEA)?

- Rahul Anand
- Ashish R Patil
- Kaushik Basu
- Mulkraj Anand
- None of these

Incorrect



■ Answered ■ Review

1 point(s)

Category: General Awareness

Which State has become the first one to setup a blood bank for cattle ?

- Odisha
- Goa
- Bihar
- Haryana

none of these

Incorrect

1 point(s)

Category: General Awareness

Coca Cola has shut down its analytics center in _____india

Pune

Delhi

Amritsar

Kolkata

none of these

Incorrect

1 point(s)

Category: General Awareness

The National Institution for Transforming India, also called NITI Aayog, was formed via a resolution of the Union Cabinet on

January 5, 2016

January 26, 2015

January 1, 2015

January 21, 2015

none of these

Incorrect

1 point(s)

Category: General Awareness

India signs agreement with Sri Lanka for developing _____

Film Sector

Railway sector

Telecom Sector

Sports

None of these

Incorrect

1 point(s)

Category: General Knowledge

Which Of the Following Organizatio bags Porter Prize 2017

EDII

Pepsico

ITC

Both A & B

Both A & c

Incorrect

1 point(s)

Category: General Awareness

Two Indian peacekeepers honoured posthumously with UN medal

Anil Bakshi

Ravi Kumar

Brijesh Thapa

Both B & C

Both A & C

Incorrect

1 point(s)

Category: General Awareness

Socialist Lenin Moreno sworn in as president Which of the following Country.

Norway

Australia

Canada

Ecuador

None of these

Incorrect

1 point(s)

Indian Coast Guard offshore patrol vessel commissioned in

Visakhapatnam

Kerala

Goa

Gujrat

None of these

Incorrect

1 point(s)

Category: General Awareness

_____ appointed chairman of Cauvery Water Disputes Tribunal

R S Chauhan

Rahul verma

Suneel Dixit

Justice Sapre

None of these

Incorrect

Justice Sapre appointed chairman of Cauvery Water Disputes Tribunal
Justice Justice Abhay Manohar Sapre appointed chairman of Cauvery Water
Disputes Tribunal appointed chairman of Cauvery Water Disputes Tribunal. Former
chairman Justice Balbir Singh Chauhan.

COMMENTS



singham

Should be provide speed test in billungels language. because lot of student in hindi medium

4 months ago



Sachin Sharma

ji We will Update It Soon

4 months ago

[RESTART QUIZ](#)[VIEW ANSWERS](#)**1 point(s)****Category: Quantitative Aptitude**

रिचा ने कोई वस्तु इसके सूची मूल्य के $\frac{4}{5}$ पर खरीदी तथा इसे सूची मूल्य से 20% अधिक पर बेचा। रिचा का लाभ प्रतिशत था।

- 40
- 30
- 50
- 25
- None of these

Incorrect

■ Answered ■ Review

1 point(s)**Category: Quantitative Aptitude**

किसी आदमी ने एक चादर Rs. 450 की खरीदी तथा इसे उसके विक्रय मूल्य के 10% के बराबर लाभ लेकर बेचा। चादर का विक्रय मूल्य था

- Rs. 475
- Rs. 460
- Rs. 500

Rs. 480

None of these

Incorrect

1 point(s)

Category: Quantitative Aptitude

किसी विद्यार्थी ने विज्ञान के विषयों में 300 में से 32% अंक अर्जित किए। वह भाषा के 200 अंक वाले प्रश्न-पत्रों में कितने अंक अर्जित करे ताकि उसके कुल मिलाकर 46% अंक हो जाएँ।

72%

67%

66%

60%

None of these

Incorrect

1 point(s)

Category: Quantitative Aptitude

137 मीटर तथा 163 मीटर लम्बाई वाली दो रेलगाड़ियों समान्तर रेल पटरियों पर एक दूसरे की ओर क्रमशः 42 किमी/घण्टा तथा 48 किमी/घण्टा की चाल से चल रही हैं। एक दूसरे को पार करने में उन्हें कितने सेकेंड का समय लगेगा ?

30

24

12

10

None of these

Incorrect

1 point(s)

Category: Quantitative Aptitude

चवाल के मूल्य में 25% की कमी होने पर कोई व्यक्ति Rs. 600 में 10 किग्रा अधिक चावल खरीद सकता है। चावल का प्रति किग्रा घटा हुआ मूल्य है।

₹ 30

₹ 24

₹ 12

₹ 10

None of these

Incorrect

1 point(s)

Category: Quantitative Aptitude

चावल के मूल्य में 25% की कटौती की गई है इसे आंतरिक मूल्य पर लाने के लिए नए मूल्य में कितने प्रतिशत की वृद्धि करनी पड़ेगी

- 9 $\frac{1}{11}$
- 11 $\frac{1}{9}$
- 33 $\frac{1}{3}$
- 36 $\frac{2}{3}$
- None of these

Incorrect

1 point(s)

Category: Quantitative Aptitude

दी गई श्रृंखला में से विषम संख्या ज्ञात कीजिये

-1 5 23 59 122 209

- 5
- 1
- 122
- 59
- None of these

Incorrect

1 point(s)

Category: Quantitative Aptitude

दी गई श्रृंखला में से विषम संख्या ज्ञात की

0 15 52 105 192 315

- 52
- 105
- 192
- 315
- None of these

Incorrect

Pattern is $(1 \times 2 \times 3) - (1 + 2 + 3) = 0$ $(2 \times 3 \times 4) - (2 + 3 + 4) = 15$ $(3 \times 4 \times 5) - (3 + 4 + 5) = 48$ & So on
 \therefore Replace 52 by 48.

1 point(s)

Category: Quantitative Aptitude

दी गई श्रृंखला में से विषम संख्या ज्ञात की

101 137 -79 -30 -378 -309

- 137

-30

-79

-378

None of these

Incorrect

$+6^2, -6^3, +7^2, -7^3$

1 point(s)

Category: Quantitative Aptitude

दी गई श्रृंखला में से विषम संख्या ज्ञात की

206 226 194 230 178 248

206

230

248

226

इनमे से कोई नहीं

Incorrect

Pattern is $+10 \times 1, -11 \times 2, +12 \times 3, -13 \times 4, +14 \times 5 \therefore$ Replace 226 \rightarrow 216

[RESTART QUIZ](#)[VIEW ANSWERS](#)

1 point(s)

Category: Quantitative Aptitude

The cost price of 20 articles is the same as the selling price of x articles. If the profit is 25%, then value of x is

 12 16 22 25

Incorrect

Since $SP \text{ of } x = CP \text{ of } 20$
 $SP/CP = 20/x$
profit % = $(20 - x) * 100/x$ So, $(20 - x)100/x = 25$
 $x = 16$



■ Answered ■ Review

1 point(s)

Category: Quantitative Aptitude

A plane left 30 min later from the schedule time & in order to reach the destination 1500 km on time, it had increase the speed by 250 kmph from the usual speed, its usual speed is

 200kmph

175kmph

750kmph

350kmph

Incorrect

Let usual speed be x kmph $1500/x - 1500/(x + 250) = 1/2$ By option $x = 750$ kmph

1 point(s)

Category: Quantitative Aptitude

Sachin is able to do a piece of work in 15 days and Q can do the same work in 20 days.

If they can work together for 4 days, what is the fraction of work left?

11/15

2/11

8/15

7/15

Incorrect

1 point(s)

Category: Quantitative Aptitude

When a student weighing 45 kgs left a class, the average weight of the remaining 59 students increased by 200g. What is the average weight of the remaining 59 students

51

57

66

75

Incorrect

1 point(s)

Category: Quantitative Aptitude

A can do a particular work in 6 days . B can do the same work in 8 days. A and B signed to do it for Rs. 3200. They completed the work in 3 days with the help of C. How much is to be paid to C?

227 RS

859 RS

366 RS

400 RS

Incorrect

1 point(s)

Category: Quantitative Aptitude

The percentage profit earned by selling an article for Rs. 1920 is equal to the percentage loss incurred by selling the same article for Rs. 1280. At what price should the article be sold to make 25% profit

Rs.2200

Rs.1500

1125

Rs.2000

Incorrect

1 point(s)

Category: Quantitative Aptitude

Thirty men can do a work in 24 days. In how many days can 20 men do the work , given that timespent per day is increased by $\frac{1}{3}$ of the previous time.

30

28

27

36

Incorrect

1 point(s)

Category: Quantitative Aptitude

is as much younger than R as he is older than T. If the sum of the ages of R and T is 50 years, what is definitely the difference between R and Q's age?

1 year

2 years

25 years

Data inadequate

Incorrect

1 point(s)

Category: Quantitative Aptitude

Sachin scored 20% of maximum marks and failed by 26 marks and when he scores 40% of the marks in the same paper he passes by 14 marks. Then find the maximum marks?

188

450

200

156

Incorrect

1 point(s)

Category: Quantitative Aptitude

When the price of every cycle was increased by 20%, the sales of scooter decreased by 20%. What was the net effect on the revenue?

5% decrease

6 % increase

4% decrease

none of these

Incorrect

Your Comment...

Comment


2 point(s)

Category: General Awareness

Which of the Following is Brand Ambassador for the Incredible India Campaign?

- Shivraj Singh Chauhan
- Saina Nehwal
- Narendra Modi
- Sachin Ramesh Tendulkar

Incorrect



■ Answered ■ Review

2 point(s)

Category: General Awareness

Which is Capital of Cuba?

- Vienna
- Laos
- Havana
- Port Louis

Incorrect

2 point(s)

Category: General Awareness

Why is weightlessness experienced while orbiting the earth in space ships?

- Inertia
- Acceleration
- Orbital Motion

Zero Gravity

Incorrect

2 point(s)

Category: General Awareness

Which is the Largest Gland in Human Body?

- Thyroid
- Liver
- Pituitary
- Salivary Gland

Incorrect

2 point(s)

Category: General Awareness

Which Country is Known as “Land of Midnight Sun” ?

- Finland
- Jakarta
- Norway
- Germany

Incorrect

2 point(s)

Category: General Awareness

What is the Total Strength of Rajya Sabha?

- 248
- 252
- 250
- 260

Incorrect

2 point(s)

Category: General Awareness

Who was the President of Indian National Congress at the time of Indian independence?

- Jawaharlal Nehru
- Rajendra Prasad
- J B Kriplaani
- V. Reddy

Incorrect

2 point(s)

Category: General Awareness

Which Circuit is used to Store One Bit of Data?

- Register
- Encoder
- Multiplexer
- Flip Flop

Incorrect

2 point(s)

Category: General Awareness

Who among the following was the first grammarian of the Sanskrit language?

Panini

Kalhan

Kalidas

Chaitanya Prabhu

Incorrect

2 point(s)

Category: General Awareness

Thomas Cup is associated with which Game?

Hockey

Football

Badminton

Cricket

Incorrect

2 point(s)

Category: General Awareness

Who among the Following is known as Father of Civil Services in India?

- Lord Cornwallis
- Warren Hastings
- Lord Wellesley
- Lord William Bentinck

Incorrect

2 point(s)

Category: General Awareness

Which day has been declared as “Balika Diwas” (Girl Day) by Ministry of Women and Children Development?

- 20 April
- 09 October
- 25 December

24 January

Incorrect

2 point(s)

Category: General Awareness

What is Retirement Age of Supreme Court Judge?

62 Years

65 Years

63 Years

58 Years

Incorrect

2 point(s)

Category: General Awareness

Species Containing Same number of electrons are called?

Isotopes

Isobars

Isotones

Isoelectronic

Incorrect

2 point(s)

Category: General Awareness

Baby Blue Syndrome is because of which Substrate?

Phosphate

Nitrate

Carbonate

Sulphate

Incorrect

2 point(s)

Category: General Awareness

Paper Currency was Started in India in Which year?

1542

1601

1861

1923

Incorrect

2 point(s)

Category: General Awareness

GATT Stands for

General Agreement on Tariffs, Tradition and Trade

General Agreement on Tradition and Trade

General Agreement on Tariffs and Trade

None of These

Incorrect

2 point(s)

Category: General Awareness

Who was the First Chairman of the Finance Commission?

K Ravichandran

A K Jain

K C Niyogi

K Santhanam

Incorrect

2 point(s)

Category: General Awareness

Which Article of Constitution provides for the institution of Panchayati Raj ?

Article 36

Article 42

Article 40

Article 38

Incorrect

2 point(s)

Category: General Awareness

Red light is used in traffic signals, because

Colour of our Blood is Red

Human identify only Red Colour

Red is Symbol of Danger

Red Light Disperses Least

Incorrect

2 point(s)

Category: General Awareness

Ganga is a result of confluence of rivers Bhagirathi and Alakananda at which place ?

Karan Prayag

Dev Prayag

Gangotri

Rudra Prayag

Incorrect

2 point(s)

Category: General Awareness

Which is the Largest Computer Memory Units among the Given options ?

Terrabyte (TB)

Gigabyte (GB)

Megabyte (MB)

Kilobyte (KB)

Incorrect

2 point(s)

Category: General Awareness

Sextant is an instrument used in which of the following ?

Gynecology

Birth Control

Navigation

Medical Treatment

Incorrect

2 point(s)

Category: General Awareness

Which organ of human body secretes Insulin?

Pancreas

Kidney

Gall Bladder

Liver

Incorrect

2 point(s)

Category: General Awareness

Which river basin is shared by more than 10 States of India ?

Indus

Ganges

Damodar

Brahmaputra

English 0%
General Awareness 0%
Quantitative Aptitude 0%
Reasoning 0%

Your result has been entered into leaderboard

Name:

E-Mail:

[SEND](#)

[RESTART QUIZ](#)

[VIEW ANSWERS](#)

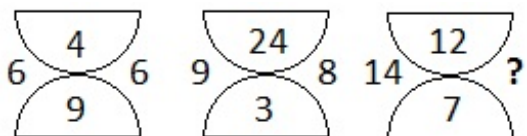
[SHOW LEADERBOARD](#)

1 point(s)

Category: Reasoning

Select the missing number from the given responses.

दिए गए विकल्पों में से लुप्त संख्या को ज्ञात कीजिए।




8

6

12

10

Incorrect



Answered Review

1 point(s)

Category: Reasoning

Direction : Find the odd word / letter from the given alternatives :

निर्देश : दिए गए विकल्पों में से विषम शब्द / अक्षर को चुनिए।

- Ganga / गंगा
- Yamuna / यमुना
- Gomti / गोमती
- Musi / मूसी

Incorrect

1 point(s)

Direction : Find the odd word / letter from the given alternatives :

निर्देश : दिए गए विकल्पों में से विषम शब्द / अक्षर को चुनिए।

- IET
- SEJ
- UCJ
- WGE

Incorrect

1 point(s)

Category: Reasoning

Direction : Find the odd word / letter from the given alternatives :

निर्देश : दिए गए विकल्पों में से विषम शब्द / अक्षर को चुनिए।

8

64

343

1331

Incorrect

1 point(s)

Category: Reasoning

Direction : Select the related letters / word / number from the given alternatives:

निर्देश : दिए गए विकल्पों में से संबंधित अक्षरों / शब्द / संख्या को चुनिए।

Glass : Water :: Cup : ?

ग्लास : पानी :: कप : ?

Tea / चाय

Spoon / चम्मच

Sugar / चीनी

Milk / दूध

Incorrect

1 point(s)

Category: Reasoning

Direction : Select the related letters / word / number from the given alternatives:

निर्देश : दिए गए विकल्पों में से संबंधित अक्षरों / शब्द / संख्या को चुनिए।

DCBA : DFFD :: XLHF : ?

XXXX

FPXX

XLHX

FHLX

Incorrect

1 point(s)

Category: Reasoning

Direction : Select the related letters / word / number from the given alternatives:

निर्देश : दिए गए विकल्पों में से संबंधित अक्षरों / शब्द / संख्या को चुनिए।

12 : 36 :: 56 : ?

70

90

60

80

Incorrect

1 point(s)

Category: Reasoning

Pointing to person in a photograph, Sumit says, "He is the only son of my grandfather's only son's wife's only son." how is the person in the photograph related to Sumit ?

एक चित्र में दिए गए व्यक्ति की ओर इशारा करते हुए सुमित कहता है, "वह मेरे दादाजी के एकलौते पुत्र की पत्नी का एकलौता पुत्र है" चित्र में दिया गया व्यक्ति सुमित से किस प्रकार संबंधित है ?

Nephew / भतीजा

Son / पुत्र

Himself / वह खुद

Father / पिता

Incorrect

1 point(s)

Category: Reasoning

Direction : A series is given with one term missing. Choose the correct alternatives from the given ones that will complete the series.

निर्देश : एक अनुक्रम दिया गया है, जिसमें एक पद लुप्त है। दिए गए विकल्पों में वह सही विकल्प चुनिए

जो अनुक्रम को पूरा करे।

a, k, e, o, i, s, __, __, q, a, u, e

m, w

m, v

m, u

m, t

Incorrect

1 point(s)

Category: Reasoning

Direction : A series is given with one term missing. Choose the correct alternatives from the given ones that will complete the series.

निर्देश : एक अनुक्रम दिया गया है, जिसमें एक पद लुप्त है। दिए गए विकल्पों में वह सही विकल्प चुनिए जो अनुक्रम को पूरा करे।

PBA, QDD, RFG, ?

THG

SHJ

TJI

UKJ

Incorrect

1 point(s)

Category: Reasoning

Direction : A series is given with one term missing. Choose the correct alternatives from the given ones that will complete the series.

निर्देश : एक अनुक्रम दिया गया है, जिसमें एक पद लुप्त है। दिए गए विकल्पों में वह सही विकल्प चुनिए जो अनुक्रम को पूरा करे।

0, 1, 8, 27, ?

60

54

64

81

Incorrect

1 point(s)

Category: Reasoning

Which of the given responses would be in meaningful order of the following words.

दिए गए विकल्पों में से कौन-सा विकल्प नीचे दिए गए शब्दों के साथ क्रम को दर्शाता है ?

Second / सेकंड

Hour / घंटा

Microsecond / माइक्रोसेकंड

Day / दिन

Minute / मिनट

3, 1, 5, 2, 4

1, 3, 5, 2, 4

3, 1, 2, 5, 4

1, 3, 2, 5, 4

Incorrect

1 point(s)

Category: Reasoning

From the given alternatives, select the word which cannot be formed by using the letters of the given words.

दिए गए विकल्पों में से उस शब्द को चुनिए, जिसे दिए गए अक्षरों के प्रयोग द्वारा नहीं बनाया जा सकता।

LIBERALISATION

RATION

BEST

NATION

ALISA

Incorrect

1 point(s)

Category: Reasoning

Find the alphabet that can be suffixed to the following words to form new words ?

नए शब्द बनाने के लिए निम्नलिखित शब्दों के बाद में कौन-सा एक अक्षर लगाया जा सकता है ?

HAT, BAR, BAT, PIN, BATH

A

D

B

E

Incorrect

1 point(s)

Category: Reasoning

In a certain code, 'CALF' is written as '190'. Similarly, how 'BABY' will be written in the code ?

किसी कूट भाषा में, 'CALF' को '190' लिखा जाता है। तो उस कूट भाषा में 'BABY' को कैसे लिखा जाएगा।

635

634

640

34

Incorrect

1 point(s)

Category: Reasoning

A, B, C, D, E, F, G and H are sitting around a circle facing the center. A is third to the left of B. H is third to the Left of C and second to the right A. F iss third to the right of D. G is between A and H. Who are the immediate neighbour of C ?

A, B, C, D, E, F, G और H एक वृत्त केन्द्र की ओर मुख करके बैठे हैं A, B के तीसरे बाएं ओर बैठा है। H, C के बाएं तीसरे तथा A दाएं से दूसरे स्थान पर बैठा है, F, D बाएं से तीसरे स्थान पर बैठा है। A और H बीच G बैठा है। C के निकटतम पड़ोसी कौन है ?

E and D / E और D

E and F/ E और F

A and B / A और B

B and H / B और H

Incorrect

1 point(s)

Category: Reasoning

A piece of paper folded and cut as shown below in the question figures.from the given answer figures, indicate how it will appear when opened.

नीचे प्रश्न आकृतियों में दिखाए अनुसार कागज को मोड़कर काटने तथा खोलने के बाद वह किस उत्तर

आकृति जैसा दिखाई देगा ?

Question Figures/प्रश्न आकृतियाँ :

Answer Figures/उत्तर आकृतियाँ :

(A) (B) (C) (D)

D)

A)

C)

B)

Incorrect

1 point(s)

Category: Reasoning

Arrange the following words as per their order in the English dictionary.

निम्नलिखित शब्दों को अंग्रेजी शब्दकोष में दिए गए क्रम के अनुसार लिखें।

Inner

Inning

Innard

Innocent

Innate

5, 3, 1, 2, 4

3, 5, 1, 2, 4

5, 3, 2, 1, 4

5, 3, 4, 2, 1

Incorrect

1 point(s)

Category: Reasoning

Which one is the exact water image of the given question figure ?

दी गई प्रश्न आकृति का सही जल प्रतिबिम्ब क्या होगा ?

Question Figure: प्रश्न आकृति :

MEAN819ING

Answer Figures: उत्तर आकृतियाँ :

WEVN819IIG

WEVN8J@IIG

WEVN8J@IIG

WEAN81@IIG

B)

A)

C)

D)

Incorrect

Category: Reasoning

Direction : in the following question One or two statements followed by two conclusions/assumption numbered I and II have been given. You have to take these given statements to be true even if they seem to be at variance from the commonly known facts. Read all the conclusions / assumptions and then decide which of the given conclusion/assumptions logically follows from the given statements disregarding commonly known facts.

निर्देश : नीचे दिए गए प्रश्न में एक या दो कथन दिए गए हैं और उसके बाद दो निष्कर्ष/पूर्वानुमान I और II दिए गए हैं। आपको दिए गए दोनों कथनों को सत्य मानना है भले ही वह सवज्ञात तथ्यों से भिन्न प्रतीत होते हों। सभी निष्कर्षों/पूर्वानुमान को पढ़िए और फिर तय कीजिए की दिया गया कौन-सा निष्कर्ष/पूर्वानुमान दिए गए कथनों का ताकिक्र रूप से अनुसरण करता है भले ही सवज्ञात तथ्य कुछ भी हों।

Statements : कथन :

I. Some dogs bark./ कुछ कुत्ते भौंकते हैं।

II. All dogs bite./ कुछ कुत्ते काटते हैं।

Conclusions : / निष्कर्ष :

I. Those dogs who do not bark also bite./ कुछ कुत्ते भौंकते नहीं हैं, वे काटते हैं।

II. Those dogs who do not bark, not necessarily bite. / जो कुत्ते भौंकते नहीं हैं जरूरी नहीं की काटते हैं।

Only conclusion I follows. / केवल निष्कर्ष I अनुसरण करता है।

Only conclusion II follows. / केवल निष्कर्ष II अनुसरण करता है। हैं।

Both the conclusions I and II follows. / दोनों निष्कर्ष I और II अनुसरण करते

Neither conclusion I nor II follows. / न तो निष्कर्ष I और न ही निष्कर्ष II अनुसरण करता है।

Incorrect

1 point(s)

Category: Reasoning

In a group of six children, 'Q' is taller than 'P' but not as much as 'L'. 'M' is taller than 'N' and 'O', but not as much as 'P'. Who is the shortest among them ?

एक समूह में छः बच्चे हैं 'Q', 'P' से लम्बा है लेकिन उतना लम्बा नहीं जितना कि 'L' | 'M', 'N' और 'O' से लम्बा है, लेकिन उतना लम्बा नहीं जितना कि 'P' | इनमें सबसे छोटा कौन है ?

M

N

O

Data is not Sufficient / डाटा अपर्याप्त है।

Incorrect

1 point(s)

Category: Reasoning

Direction : in the following question One or two statements followed by two conclusions/assumption numbered I and II have been given. You have to take these given statements to be true even if they seem to be at variance from the commonly known facts. Read all the conclusions / assumptions and then decide which of the given conclusion/assumptions logically follows from the given statements disregarding

commonly known facts.

निर्देश : नीचे दिए गए प्रश्न में एक या दो कथन दिए गए हैं और उसके बाद दो निष्कर्ष/पूर्वानुमान I और II दिए गए हैं। आपको दिए गए दोनों कथनों को सत्य मानना है भले ही वह सवज्ञात तथ्यों से भिन्न प्रतीत होते हों। सभी निष्कर्षों/पूर्वानुमान को पढ़िए और फिर तय कीजिए की दिया गया कौन-सा निष्कर्ष/पूर्वानुमान दिए गए कथनों का ताकिक्र रूप से अनुसरण करता है भले ही सवज्ञात तथ्य कुछ भी हों।

Statement ; कथन :

Continuous training is essential for all employees to increase their productivity.

सभी कमछारियों की उत्पादकता बढ़ाने के लिए निरंतर प्रशिक्षण आवश्यक हैं।

Assumptions : पूर्वानुमान :

I. Training is an essential components for productivity. / उत्पादकता के लिए प्रशिक्षण एक आवश्यक घटक है।

II. Profitability and productivity are supplementary to each other. / लाभप्रदता और उत्पादकता एक दूसरे के पुरक हैं।

- Only assumption I follows. / केवल पूर्वानुमान I अंतनिहित है।
- Only assumption II follows. / केवल पूर्वानुमान II अंतनिहित है।
- Both the assumption I and II follows. / दोनों पूर्वानुमान I और II अंतनिहित हैं।
- Neither assumption I nor II follows. / कोई पूर्वानुमान अंतनिहित नहीं है।

Incorrect

1 point(s)

Category: Reasoning

A word is represented by only one set of numbers as given in any one of the alternatives. The set of numbers given in the alternatives are represented by two class of alphabets as in to matrices given below. The columns and row of matrix I are numbered from 0 to 4 and that of matrix II are numbered from 5 to 9. A letters from these matrices can be represented first by its row and next by its column, e.g., 'A' can be represented by 00, 21 etc. and 'T' can be represented by 59, 67, etc. Similarly, identify the set for the word 'RUST'.

एक शब्द केवल एक संख्या समूह द्वारा दर्शाया गया है, जैसा की विकल्पों में से किसी एक में दिया गया है। विकल्पों में दिए गए संख्या समूह अक्षरों के वर्गों द्वारा दर्शाए गए हैं, जैसा की निचे दिए गए दो आव्यूहों में हैं। आव्यूह I से स्तम्भ और पंक्ति की संख्या 0 से 4 दी गई है और आव्यूह II की 5 से 9. इन आव्यूहों से एक अक्षर को पहले उसकी पंक्ति और बाद में स्तम्भ संख्या द्वारा दर्शाया जा सकता है। उदाहरण के लिए 'F' को 00, 21 आदि द्वारा दर्शाया जा सकता है तथा 'A' को 59, 67 आदि द्वारा दर्शाया जा सकता है। इसी तरह से आपको प्रश्न में दिए गए शब्द 'RUST' के लिए संख्या समूह को पहचानना है।

Matrix - I						Matrix -II					
	0	1	2	3	4		5	6	7	8	9
0	A	E	F	G	C	5	N	S	R	S	T
1	H	B	I	J	K	6	Q	O	T	U	X
2	M	A	C	B	C	7	W	X	P	U	V
3	D	E	F	D	L	8	Y	Z	Y	Q	X
4	H	I	J	K	E	9	Z	W	R	S	R

57, 78, 96, 56

97, 68, 55, 56

97, 68, 56, 59

57, 68, 78, 56

Incorrect

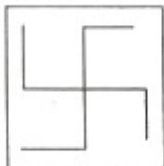
1 point(s)

Category: Reasoning

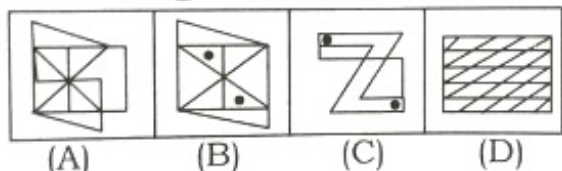
In which figure is the question figure embedded ?

दी गई उत्तर आकृतियों में से उस एक को चुनिए जिसमें प्रश्न आकृति निहित है ?

Question figure/प्रश्न आकृति :



Answer figures/उत्तर आकृतियाँ :



A)

B)

C)

D)

Incorrect

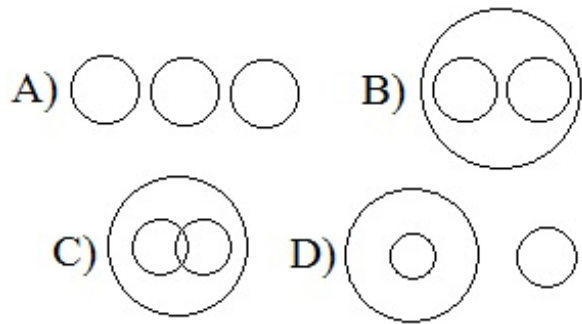
1 point(s)

Category: Reasoning

Identify the diagram that represents the best relationship among classes given below :

वह आरेख चुनिए जो नीचे दिए गए वर्गों के बीच संबंध का सर्वोत्तम निरूपण करता है।

Human being / मानव, Girl / लड़की, Boy / लड़का



C)

B)

D)

A)

Incorrect

1 point(s)

Category: Quantitative Aptitude

When n divided by 8, the remainder is 3. When $2n$ is divided by 4, the remainder is-
यदि n को 8 से विभाजित किया जाता है तो शेषफल 3 बचता है। यदि $2n$ को 4 से विभाजित किया जाता है तो शेषफल क्या होगा ?

0

1

3

2

Incorrect

1 point(s)

Category: Quantitative Aptitude

The difference between the circumference and diameter of a circle is 300m. The radius of the circle is – (Take $\pi = \frac{22}{7}$)

यदि किसी वृत्त की परिधि और व्यास का अंतर 300मीटर है तो वृत्त की त्रिज्या है – ($\pi = \frac{22}{7}$ प्रयोग करें)

35 metres / मीटर

70 metres / मीटर

140 metres / मीटर

50 metres / मीटर

Incorrect

1 point(s)

Category: Quantitative Aptitude

The value of :

का मान ज्ञात करें।

$$\sqrt{156 + \sqrt{156 + \sqrt{156 + \dots}}}$$

13

11

9

12

Incorrect

1 point(s)

Category: Quantitative Aptitude

If 4 boys of same kind are sold at the cost price of 5 toys, then the profit will be –

यदि एक ही प्रकार के 4 खिलौने, 5 खिलौने के क्रम मूल्य पर बेचे जाते हैं तो लाभ होगा –

25%

30%

20%

16%

Incorrect

1 point(s)

Category: Quantitative Aptitude

Harendra travelled a distance of 47 km in 12 hours, partly on foot at the rate of 3 km/h and partly on bicycle at the rate of 5 km/h. The distance travelled by bicycle was-

हरेन्द्र ने 47 किमी की यात्रा 12 घंटे में तय की वह कुछ भाग 3 किमी / घंटा की चाल से पैदल तय करता है

और कुछ भाग 5 किमी/ घंटा की चाल से साईकिल से तय करता है। उसके द्वारा साईकिल से तय की गई दूरी ज्ञात करें।

27.5 km/किमी

37 km/किमी

19.5 km/किमी

23 km/किमी

Incorrect

1 point(s)

Category: Quantitative Aptitude

If $A : B = 2 : 3$, $B : C = 5 : 2$ and $C : D = 3 : 1$ then $A : B : C$ is –

यदि $A : B = 2 : 3$, $B : C = 5 : 2$ और $C : D = 3 : 1$ तो $A : B : C$ का मान ज्ञात करें।

10 : 2 : 6 : 15

10 : 15 : 2 : 6

6 : 2 : 10 : 15

2 : 10 : 15 : 6

Incorrect

1 point(s)

Category: Quantitative Aptitude

Find the average of 3.23, 0.03, 0.303, 0.33, and 0.032

3.23, 0.03, 0.303, 0.33, और 0.032 का औसत ज्ञात करें।

1

0.785

0.685

07.85

Incorrect

1 point(s)

Category: Quantitative Aptitude

Which of the following successive discounts is better to a customer ?

निम्नलिखित में से कौन-सा क्रमिक बट्टा किसी ग्राहक के लिए उचित रहेगा ?

(i) 20%, 15%, 10%

(ii) 25%, 12%, 8%

i)

ii)

Both / दोनों

None of these / इनमे से कोई नहीं

Incorrect

1 point(s)

Category: Quantitative Aptitude

A and B can separately complete a piece of work in 15 days and 25 days respectively. They worked together for some time, then B left the work. If A complete rest of the work in 7 days, then B worked for-

A और B किसी काम को क्रमशः अलग अलग 15 दिनों तथा 25 दिनों में कर सकते हैं वे कुछ समय के लिए एक साथ काम करते हैं। उसके बाद B काम छोड़ देता है। यदि A शेष काया 7 दिनों में खत्म करता है, तो B ने कितने दिनों तक काम किया ?

4 days / दिन

5 days / दिन

8 days / दिन

6 days / दिन

Incorrect

1 point(s)

Category: Quantitative Aptitude

In a examination a candidate must secure 40% marks to pass. A candidate, who gets 110 marks fails by 30 marks. Find the maximum marks for the examination.

एक परीक्षा में उत्तीर्ण होने के लिए 40% अंक अनिवार्य हैं एक प्रतियोगी को 110 अंक प्राप्त होते हैं और वह 30 अंको से असफल हो जाता है, तो परीक्षा के अधिकतम अंक कितने हैं ?

300

250

350

450

Incorrect

1 point(s)

Category: Quantitative Aptitude

A Box 75 blue balls, 150 red balls and 50 black balls. If 20% of blue balls and 50% of red balls are taken away, then percentage of black balls at presents is –

एक बक्से में 75 नीली, 150 लाल तथा 50 काली गेंदे हैं। यदि 20% नीली गेंद तथा 50% लाल गेंद निकाल ली गई, तो वतमान में कितने प्रतिशत काली गेंदे हैं ?

$17\frac{3}{37}\%$

$7\frac{17}{37}\%$

$27\frac{1}{37}\%$

$24\frac{1}{37}\%$

Incorrect

1 point(s)

Category: Quantitative Aptitude

The sum of the numerator and denominator of a positive fraction is 11 if 2 is added to both numerator and denominator, then the fraction is increased by $\frac{1}{24}$. The difference of numerator and denominator of the fraction is –

एक धनात्मक भिन्न के अंश तथा हर का योग 11 है यदि अंश तथा हर दोनों में 2 जोड़ दिया जाए, तो भिन्न में $\frac{1}{24}$ की वृद्धि हो जाती है। भिन्न के अंश तथा हर का अंतर ज्ञात करें।

5

1

3

9

Incorrect

1 point(s)

Category: Quantitative Aptitude

If m men can do a work in r days, then the number of days taken by $(m+n)$ men to do it is-

यदि m व्यक्ति r दिनों में काम कर सकता है, तब $(m+n)$ आदमियों द्वारा करने में लिया गया समय है-

$(m+n)/mr$ days / दिन

$m(m+n)/r$ days / दिन

$(m+n)r/m$ days / दिन

$mr/m+n$ days / दिन

Incorrect

1 point(s)

Category: Quantitative Aptitude

The different between the compound interest and the simple interest on a certain sum at 8% per annum for 2 years is Rs.104. The sum is-

किसी निश्चित धनराशि पर 8% प्रति वाषिष्ठ दर से 2 वर्षों के चक्रवृत्त तथा साधारण ब्याज का अंतर रु 104 है। तो धनराशि है –

Rs./ रु 16000

Rs./ रु 16250

Rs./ रु 16500

Rs./ रु 17000

Incorrect

1 point(s)

Category: Quantitative Aptitude

By selling 55 metres of cloth a person gains the cost price of 22 metres. Find his gain percentage.

55 मी. कपडा बेचकर एक व्यक्ति 22 मी. कपडे के क्रय मूल्य के बराबर लाभ कमाता है। तो उसका प्रतिशत लाभ ज्ञात करें।

16 $\frac{2}{3}$ %

33 $\frac{1}{3}$ %

40%

35%

Incorrect

1 point(s)

Category: Quantitative Aptitude

The arenge number that will divide 743 and 915 leaves remainders 7 and 3 respectively is :

वह अधिकतम संख्या क्या है जिससे 743 और 915 में भाग देने पर क्रमशः 7 और 3 शेष बचे ?

15

16

19

21

Incorrect

1 point(s)

Category: Quantitative Aptitude

If the altitude of an equilateral triangle is $7\sqrt{3}$ cm, then its area would be.

यदि एक समबाहु त्रिभुज की ऊंचाई $7\sqrt{3}$ सेमी है. तो इसका क्षेत्रफल क्या है।

$35\sqrt{3}$ cm²/सेमी²

$42\sqrt{3} \text{ cm}^2/\text{सेमी}^2$

$25\sqrt{3} \text{ cm}^2/\text{सेमी}^2$

$49\sqrt{3} \text{ cm}^2/\text{सेमी}^2$

Incorrect

1 point(s)

Category: Quantitative Aptitude

A person give 20% of his income to his elder son, 30% to remaining to the younger son and 10% of the balance, he donated to a trust. Hi si left with Rs. 5040. His income was-

एक व्यक्ति अपनी आय का 20% अपने बड़े पुत्र को, शेष का 30% छोटे पुत्र को और शेष का 10% एक संगठन में दान कर देता है। उसके पास Rs. 5040 बच जाते हैं, तो उसकी आय कितनी थी ?

Rs.₹ 24000

Rs.₹ 20000

Rs.₹ 16000

Rs.₹ 10000

Incorrect

1 point(s)

Category: Quantitative Aptitude

If the ratio of principal and simple interest for 1 year is 25 : 3, then the rate of interest is –

यदि एक साल के मूलधन एवं साधारण ब्याज का अनुपात 25 : 3 है, तो ब्याज की दर क्या है ?

10%

15%

12%

$8\frac{1}{3}\%$

Incorrect

1 point(s)

Category: Quantitative Aptitude

G is the centroid of the equilateral $\triangle ABC$. If $AB = 18$ cm, then length of AG is-

G, समबाहु त्रिभुज ABC का केन्द्रक है यदि $AB = 18$ सेमी, तब AG की लम्बाई है –

$6\sqrt{3}$ cm/सेमी

6 cm/सेमी

$8\sqrt{3}$ cm/सेमी

$18\sqrt{3}$ cm/सेमी

Incorrect

1 point(s)

Category: Quantitative Aptitude

The Average of five numbers is 9. When three new numbers are included, the average of the eight numbers becomes 11.5. The average of the three new numbers is-

पांच संख्याओं का औसत 9 है। जब तीन नई संख्याओं को सम्मिलित किया जाता है, 8 संख्याओं का औसत 11.5 हो जाता है नई तीन संख्याओं का औसत है –

11.50

15.66

13.60

14.57

Incorrect

1 point(s)

Category: Quantitative Aptitude

Direction : Study the following graph and answer the given question.

निर्देश : निम्नलिखित ग्राफ का अध्ययन करें और दिए गए प्रश्न का उत्तर दें।



Q-The ratio of the barren land to the cultivated land is :

बंजर भूमि का, जोती गयी भूमि से क्या अनुपात है :

3 : 4

4 : 3

4 : 5

5 : 6

Incorrect

1 point(s)

Category: Quantitative Aptitude

Direction : Study the following graph and answer the given question.

निर्देश : निम्नलिखित ग्राफ का अध्ययन करें और दिए गए प्रश्न का उत्तर दें।



Q. What percent of total land is used for cultivation ?

कुल भूमि का कितना प्रतिशत जोती हुई भूमि के लिए प्रयोग किया गया है ?

20%

30%

25%

35%

Incorrect

1 point(s)

Category: Quantitative Aptitude

Divide 27 into two part so that 5 times the first and 9 times the second together equal to 199. Then ratio of the first and second parts is –

27 को दो भागों में इस प्रकार विभाजित करें कि पहले भाग में का 5 गुना और दूसरे भाग का 9 गुना दोनों मिलकर 199 के बराबर हो तो पहले और दूसरे भाग का अनुपात है –

5 : 2

13 : 14

11 : 16

4 : 5

Incorrect

1 point(s)

Category: Quantitative Aptitude

In a group students, 69% can speak English and 60% can speak Hindi. If 27 of the students can speak none of the two languages, then what percent of the group can

Speak both the languages?

छात्रों के एक समूह में 69% छात्र अंग्रेजी और 60% छात्र हिंदी बोल सकते हैं। यदि 27 छात्र दोनों में से कोई भी भाषा नहीं बोल सकते हैं, तो कितने प्रतिशत छात्र दोनों भाषाएँ बोल सकते हैं ?

44%

56%

29%

31%

Incorrect

1 point(s)

Category: English

Direction : In the following questions, some parts of the sentences have error and some are correct, Find out which part of a sentence has an error. The answer of the part is the answer. If a sentence is free from error, your answer is (4). I.e. No error.

It is the duty of all citizens to do his utmost (A) / to define the hard-won (B) / freedom of the country. (C) / No error (D)

A)

D)

B)

C)

Incorrect

1 point(s)

Category: English

Direction : In the following questions, some parts of the sentences have error and some are correct, Find out which part of a sentence has an error. The answer of the part is the answer. If a sentence is free from error, your answer is (4). I.e. No error.

The teacher (A)/ was pleased (B)/ at Rahul. (C)/ No error (D)

D)

C)

B)

A)

Incorrect

1 point(s)

Category: English

Direction : In the following questions, some parts of the sentences have error and some are correct, Find out which part of a sentence has an error. The answer of the part is the answer. If a sentence is free from error, your answer is (4). I.e. No error.

It is true that a sense of duty may at time (A) / render is necessary for you to do that (B) / which is displeasing to your companions. (C) / No error (D)

A)

B)

C)

D)

Incorrect

1 point(s)

Category: English

Directions : In the following question sentence are given with blank to be fill in with an appropriate words(s). Four alternatives are suggested for each question. Choose the correct alternative out of the four answer.

The film we saw last night was boring I wish I _____it.

shouldn't have seen

hadn't seen

didn't seen

wouldn't have seen

Incorrect

1 point(s)

Category: English

Directions : In the following question sentence are given with blank to be fill in with an appropriate words(s). Four alternatives are suggested for each question. Choose the correct alternative out of the four answer.

Must we be subjected to your _____ complaints all day long?

tiresome

fearsome

awesome

gleesome

Incorrect

1 point(s)

Category: English

Directions : In the following question sentence are given with blank to be fill in with an appropriate words(s). Four alternatives are suggested for each question. Choose the correct alternative out of the four answer.

But for working hard, you_____.

would have failed

had failed

failed

would failed

Incorrect

1 point(s)

Category: English

Direction : in the following question, out of the four alternatives, choose the one which best expresses the meaning of the given as your answer.

Usual

- Same
- Simple
- Customary
- Save

Incorrect

1 point(s)

Category: English

Direction : in the following question, out of the four alternatives, choose the one which best expresses the meaning of the given as your answer.

Heralded

Foretell

Proclaimed

Protested

Rewarded

Incorrect

1 point(s)

Category: English

Direction : in the following question, out of the four alternatives, choose the one which best expresses the meaning of the given as your answer.

Detrimental

Deplorable

Fundamental

Harmful

Disgraceful

Incorrect

1 point(s)

Category: English

Direction : in the following question, choose the word opposite in meaning to the given word as your answer.

Peruse

Ignore

Write

Speak

Listen

Incorrect

1 point(s)

Category: English

Direction : in the following question, choose the word opposite in meaning to the given word as your answer.

Affluence

indigence

Liability

Sorrow

Steal

Incorrect

1 point(s)

Category: English

Direction : In the following questions four alternatives are given for the idiom / phrase underlined in the sentence. Choose the alternative which best expresses the meaning of the idiom / phrase.

Ramesh expects his subordinates to be always at the his beck and call.

- at rest
- at work
- at his disposal
- at their desks

Incorrect

1 point(s)

Category: English

Direction : In the following questions four alternatives are given for the idiom / phrase underlined in the sentence. Choose the alternative which best expresses the meaning of the idiom / phrase.

His voice gets on my nerves.

- make me sad

irritates me sad

make me ill

excited

Incorrect

1 point(s)

Category: English

Direction : In the following questions four alternatives are given for the idiom / phrase underlined in the sentence. Choose the alternative which best expresses the meaning of the idiom / phrase.

The players stormed out of the stadium after heated game.

went out breaking things on their way

crept out through a different exit

went out meekly

went showing their anger

Incorrect

1 point(s)

Category: English

Direction : In the following question a part of the sentence is underlined. Below are give alternatives to the underlined part at (1), (2) and (3) which may improve the sentence. Choose the correct alternatives. In case no improvement is needed, your answer is (4).

Nowadays, there are much more criminals than policemen.

- many more
- more
- much
- No improvement

Incorrect

1 point(s)

Category: English

Direction : In the following question a part of the sentence is underlined. Below are give alternatives to the underlined part at (1), (2) and (3) which may improve the sentence. Choose the correct alternatives. In case no improvement is needed, your answer is (4).

The article should not exceed more than hundred words.

- exceed beyond
- exceed than
- exceed

No improvement

Incorrect

1 point(s)

Category: English

Direction : In the following question out of the four alternatives choose the one which can be substituted for the given words / sentence.

Capable of being shaped or bent.

Strong

Stringent

Malleable

Stiff

Incorrect

1 point(s)

Category: English

Direction : In the following question out of the four alternatives choose the one which can be substituted for the given words / sentence

Talking disrespectfully of sacred things.

Haresy

Atheism

Blasphemy

Apostasy

Incorrect

1 point(s)

Category: English

Direction : In the following question, there are four different words out of which one is correctly spelt. Find the correctly spelt word.

Ambivalenet

Ambievalente

Ambivalent

Amebievalente

Incorrect

1 point(s)

Category: English

Direction : In the following question, there are four different words out of which one is correctly spelt. Find the correctly spelt word.

Equanimous

Equanamous

Equanemous

Ecuanimous

Incorrect

1 point(s)

Category: English

Direction (71 – 75) : in the following passage, some of the the words have been left out. Read the passage carefully, and choose the correct answer to each question out of the four alternatives, and fill in the blanks.

Cloze Test

A__become a flowing stream only when there is a continuity of 72 life in a society. In other words, a 73 culture comes into existence when people 74 a continuous way of life. Such continuity expresses itself 75 various ways in common traditions and norms of conduct.

Civilization

Culture

Idea

Philosophy

Incorrect

1 point(s)

Category: English

Direction (72 – 75) : in the following passage, some of the the words have been left out. Read the passage carefully, and choose the correct answer to each question out of the four alternatives, and fill in the blanks.

Cloze Test

A 71 become a flowing stream only when there is a continuity of ___life in a society. In other words, a 73 culture comes into existence when people 74 a continuous way of life. Such continuity expresses itself 75 various ways in common traditions and norms of conduct.

- Individual
- nature's
- society's
- Collective

Incorrect

1 point(s)

Category: English

Direction (73 – 74) : in the following passage, some of the the words have been left out. Read the passage carefully, and choose the correct answer to each question out of the four alternatives, and fill in the blanks.

Cloze Test

A 71 become a flowing stream only when there is a continuity of 72 life in a society. In other words, a 73 culture comes into existence when people 74 a continuous way of life. Such continuity expresses itself 75 various ways in common traditions and norms of conduct.

distinctive

unique

clear

Foggy

Incorrect

1 point(s)

Category: English

Direction (74 – 75) : in the following passage, some of the the words have been left out. Read the passage carefully, and choose the correct answer to each question out of the four alternatives, and fill in the blanks.

Cloze Test

A 71 become a flowing stream only when there is a continuity of 72 life in a society. In other words, a 73 culture comes into existence when people 74 a continuous way of life. Such continuity expresses itself 75 various ways in common traditions and norms of conduct.5

develop

create

follow

end

Incorrect

1 point(s)

Category: English

Direction (75) : in the following passage, some of the the words have been left out. Read the passage carefully, and choose the correct answer to each question out of the four alternatives, and fill in the blanks.

Cloze Test

A 71 become a flowing stream only when there is a continuity of 72 life in a society. In other words, a 73 culture comes into existence when people 74 a continuous way of life. Such continuity expresses itself___various ways in common traditions and norms of conduct.

in

of

with

at

Incorrect

1 point(s)

Category: General Awareness

Soil of Mars planet is red in color due to-

मंगल ग्रह की मिट्टी किस तत्व की उपस्थिति के कारण लाल है ?

- Iron Oxide / आयरन ऑक्साइड
- Lead Oxide / ऑक्साइड
- Copper oxide / कॉपर ऑक्साइड
- Aluminium Oxide / अलुमिनियम ऑक्साइड

Incorrect

1 point(s)

Category: General Awareness

If at any location on earth, the time is 9:30AM at a place and, at same time on another place is 6:45PM, then find the longitudinal distance between both places?

यदि पृथ्वी पर स्थित किसी स्थान पर 9:30 AM बजे हैं ठीक उसी समय किसी दूसरे स्थान पर 6:45 PM बजे हो तो दोनों स्थानों के बीच देशान्तरिय दूरी होगी –

- $82\frac{1}{2}^\circ$
- $87\frac{3}{4}^\circ$
- $138\frac{3}{4}^\circ$
- Can't be calculated / गणना नहीं की जा सकती

Incorrect

1 point(s)

Category: General Awareness

The deepest point location in Indian Ocean is –

हिन्द महासागर में सबसे गहरा स्थान है-

- Java Trench / जावा गत
- Peorto Trench / प्यूर्टो गत
- Meriana Trench / मेरियाना गत
- None of these / इनमे से कोई नहीं

Incorrect

1 point(s)

Category: General Awareness

Who presides the joint sitting of parliament in the absence of Speaker ?

लोकसभा अध्यक्ष की अनुपस्थिति में संसद के संयुक्त सत्र की अध्यक्षता कौन करता है ?

- Deputy Speaker / लोकसभा उपाध्यक्ष
- Chairman / राज्य सभा के चेयरमैन
- Deputy Chairman / उप-सभापति

A person chosen by the MPs / सांसदों द्वारा चुना गया कोई व्यक्ति

Incorrect

1 point(s)

Category: General Awareness

The first Commonwealth Games were held in-

प्रथम कॉमनवेल्थ खेल कब हुए थे ?

1905

1925

1930

1945

Incorrect

1 point(s)

Category: General Awareness

Historic Chandragiri Fort is located in which of the following states ?

निम्नलिखित में से किस राज्य में ऐतिहासिक चन्द्रगिरि का किला स्थित है ?

Andhra pradesh / आंध्र प्रदेश

Karnataka / कर्नाटक

Maharashtra / महाराष्ट्र

Telangana / तेलंगाना

Incorrect

1 point(s)

Category: General Awareness

The longest river of South Indian is –

दक्षिण भारत की सबसे लम्बी नदी है –

Mahanadi / महानदी

Godavari / गोदावरी

Krishana / कृष्णा

Naramada / नर्मदा

Incorrect

1 point(s)

Category: General Awareness

Pitts India Act was passed in-

पिट्स इंडिया एक्ट पारित हुआ –

1773

1784

1813

1909

Incorrect

1 point(s)

Category: English

The rank of India is Sustainable Development Index is-

सतत विकास सूचकांक में भारत का स्थान है –

120

95

110

85

Incorrect

1 point(s)

Category: General Awareness

America got independence by-

अमेरिका को आजादी मिली

London Treaty / लंदन संधि से

Paris Treaty / पेरिस संधि से

Moscow Treaty / मॉस्को संधि से

Rome Treaty / रोम संधि से

Incorrect

1 point(s)

Category: General Awareness

Who wrote the 'Bijak'?

बीजक किसके द्वारा लिखी गई है ?

Surdas / सूरदास द्वारा

Kabir / कबीर द्वारा

Ravidas / रविदास द्वारा

Rahim / रहीम द्वारा

Incorrect

1 point(s)

Category: General Awareness

Which dance is performed only by male artist ?

कौन-सा नृत्य केवल पुरुष कलाकारों द्वारा प्रस्तुत किया जाता है ?

Mohiniattam / मोहिनीअट्टम

Odissi / ओडिसी

Kathakali / कथकली

Manipuri / मणिपुरी

Incorrect

1 point(s)

Category: General Awareness

Which waves cannot be transmitted through vacuum ?

कौन-सी तरंगें निर्वात में संचरण नहीं कर सकतीं ?

Light / प्रकाश

Heat / ताप

Sound / ध्वनि

Electromagnetic / विद्युत चुम्बकीय

Incorrect

1 point(s)

Category: General Awareness

The president can dissolve the Lok Sabha on-

राष्ट्रपति लोकसभा को भंग कर सकते हैं –

- Recommendation of chief Justice of India / भारत के मुख्य न्यायाधीश की अनुशंसा पर
- Lok Sabha's Recommendation / लोक सभा की अनुशंसा पर
- Recommendation ऑफ Union Cabinet / केन्द्रीय मंत्रिमण्डल की अनुशंसा पर
- Recommendation of Rajya Sabha / राज्य सभा के अनुशंसा पर

Incorrect

1 point(s)

Category: General Awareness

The color having longest wavelength is-

अधिकतम तरंगदैर्घ्यालाला रंग है।

- Red / लाल
- Green / हरा
- Blue / नीला
- Black / काला

Incorrect

1 point(s)

Category: General Awareness

The first nuclear submarine of India is –

भारत की पहली परमाणु पनडुब्बी है –

Vidyut / विद्युत्

Chakra / चक्र

Pataal / पाताल

Rakshak / रक्षक

Incorrect

1 point(s)

Category: General Awareness

Who established Mughal dynasty ?

मुगल वंश के संस्थापक कौन थे ?

Jahangir / जहांगीर

Sher Shah /शेरशाह

Babar / बाबर

Akbar / अकबर

Incorrect

1 point(s)

Category: General Awareness

The largest state of India is-

भारत का बड़ा राज्य हैं –

- Karanataka / कर्नाटक
- Madhya Pradesh / मध्य प्रदेश
- Rajasthan / राजस्थान
- Gujarat / गुजरात

Incorrect

1 point(s)

Category: General Awareness

Sensex includes the following securities –

सेंसेक्स में निम्न प्रतिभूतियाँ होती हैं?

- 25
- 40
- 30
- 45

Incorrect

1 point(s)

Category: General Awareness

Inside water, an air bubble behave like .

पानी के अन्दर, हवा का बुलबुला किस तरह का वर्ताव करता है ?

- a convex lens / एक उत्तल लेंस का
- a Concave lens / एक अवतल लेंस का
- a flat plate / एक समतल प्लेट का
- None of these / इनमे से कोई नहीं

Incorrect

1 point(s)

Category: General Awareness

In which of the following place one horned Rhinoceros is found ?

निम्न में से कहाँ एक सींग वाला गैंडा पाया जाता है ?

- Arunachal Pradesh and Tripura / अरुणाचल प्रदेश एवं त्रिपुरा में
- West Bengal and Assam / पश्चिम बंगाल एवं असम में
- Arunachal Pradesh and Assam / अरुणाचल प्रदेश एंड असम में
- West Bengal and Tripura / पश्चिम बंगाल एवं त्रिपुरा में

Incorrect

1 point(s)

Category: General Awareness

How many states in India Shares the boundary with Delhi ?

कितने राज्य दिल्ली से सीमा साझेदारी करते हैं ?

1

2

3

4

Incorrect

1 point(s)

Category: General Awareness

Kabir das was the contemporary of –

कबीर दास समकालीन थे –

Balban / बलबन के

Shivaji / शिवाजी के

Sikander Lodhi / सिकंदर लोदी के

Shah Jahan / शाहजहां के

Incorrect

1 point(s)

Category: General Awareness

Paper currency was introduced first in India in –
भारत में कागजी मुद्रा की पहली बार शुरुआत कब हुई ?

1791

1862

1919

1948

Incorrect

1 point(s)

Category: General Awareness

The total districts in India is –
भारत के कुल जिले हैं –

550

800

640

552

Incorrect

1 point(s)

Category: General Awareness

Life Insurance Corporation is an Indian state owned insurance group and investment company headquarter

- Mumbai
- Delhi
- Lucknow
- Agra
- None of these

Incorrect



■ Answered ■ Review

1 point(s)

Category: General Awareness

Bandipur National Park an 874 -sq Km forested reserve in the southern Indian state of ?

- Kerala
- Tamil Nadu
- Telangana
- Karnataka
- None of these

Incorrect

1 point(s)

Category: General Awareness

Hilary Rodham Clinton is famous Of Which Of the following Field?

- Art
- Sports
- Cinema
- Politics
- None of these

Incorrect

1 point(s)

Category: General Awareness

National Technology Day celebrated across india on

- 1st may
- 5th march
- 11th may
- 21st June

None of these

Incorrect

The first Indigenous Aircraft Hansa -3 Was Test flown At Bangalore On this day

1 point(s)

Category: General Awareness

What Is the Capital City Of Uganda ?

Lima

Rome

Kampala

Hawana

None of these

Incorrect

1 point(s)

jamini roy distinguished himself in the field of

Badminton

Painting

Theater

Sculpture

None of these

Incorrect

1 point(s)

Category: General Awareness

Chakan Gaan -NGAi, a Post- harvested festival is celebrated in _____

Goa

Sikkim

Manipur

Nagaland

None of these

Incorrect

1 point(s)

Category: General Awareness

FiFi Awards are given in _____Industry.

Film

Home Appliance

Perfumes

Automobiles

Textile

Incorrect

1 point(s)

Category: General Awareness

Which of the following prize is also known as the Alternative Nobel Prize ?

Abel prize

Grammy Award

Booker prize

Right Livelihood award

Magsaysay award

Incorrect

1 point(s)

Category: General Awareness

In which year National Film Award were initiated?

1954